



Rubbish 3D shapes

Look at these items of rubbish, what 3D shapes are they?

				
Name of shape:	Name of shape:	Name of shape:	Name of shape:	Name of shape:
				
Name of shape:	Name of shape:	Name of shape:	Name of shape:	Name of shape:

How many 3D shapes can you name?

S _ _ _ _

P _ _ _ _

C _ _

T _ _ _ _ _ P _ _ _ _

C _ _ _ _

C _ _

Write any others you can think of.

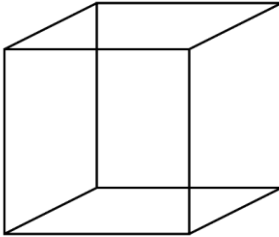
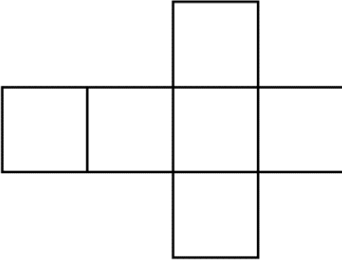
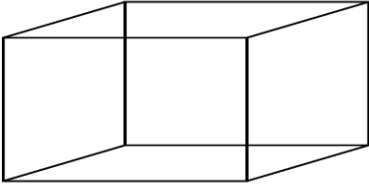
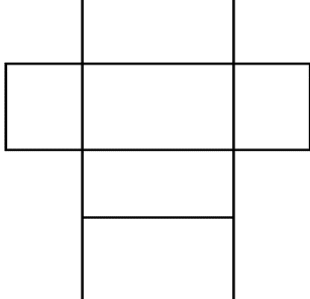

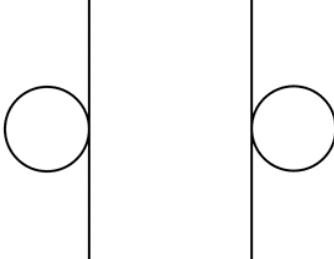
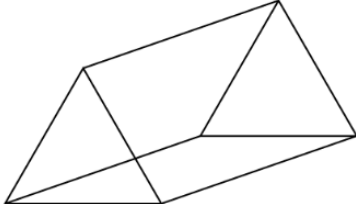
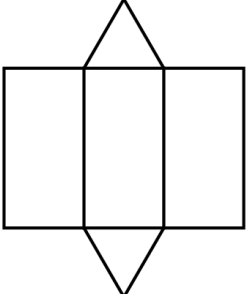




A net is what a 3D (three-dimensional) shape would look like if it were opened out flat.

Look around your house and find items that are these shapes, if you can, carefully open them out to look at their net.

Complete the table by writing the name of the shape and any rubbish items that are that shape.

Name of shape	Shape	Net	Rubbish item
			
			
			
			

What 2D shapes can you see within the nets?

